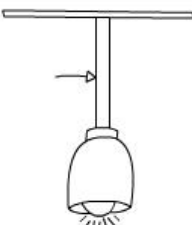
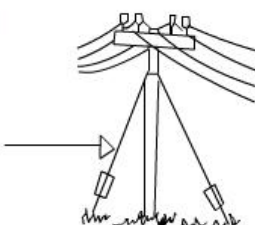
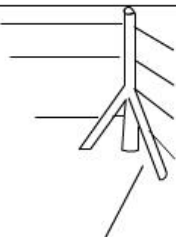
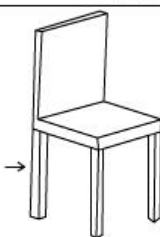

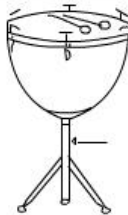



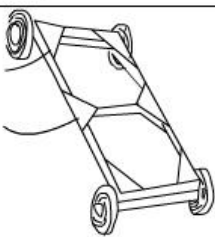


Grade 8 Technology Worksheet

Knowledge of frame structures, reinforcement and relationships 1

Identify the following members

- Identify whether these are struts, ties, guys or gussets:

1.1 	1.2 
1.3 	1.4 
1.5 	1.6 
1.7 	1.8 
1.9 	1.10 

[10 x 2 marks]

[20 marks]

Grade 8 Technology Worksheet

Suggested Solutions

Question number	Possible marks	Answers
1	10 x 2 marks	1.1 tie 1.2 guy 1.3 strut 1.4 strut 1.5 strut 1.6 strut 1.7 guy 1.8 strut 1.9 gusset 1.10 gusset

[20 marks]